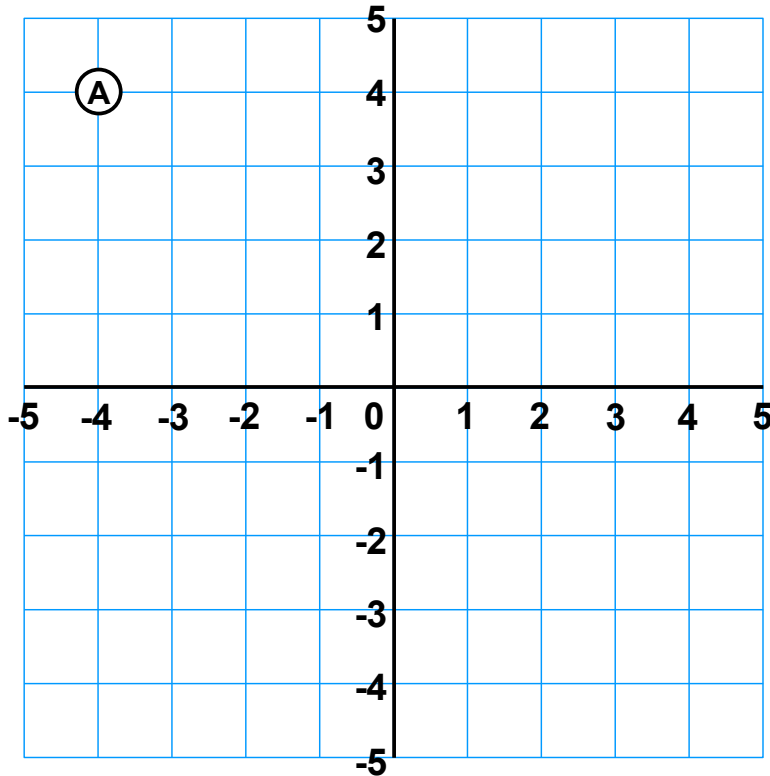
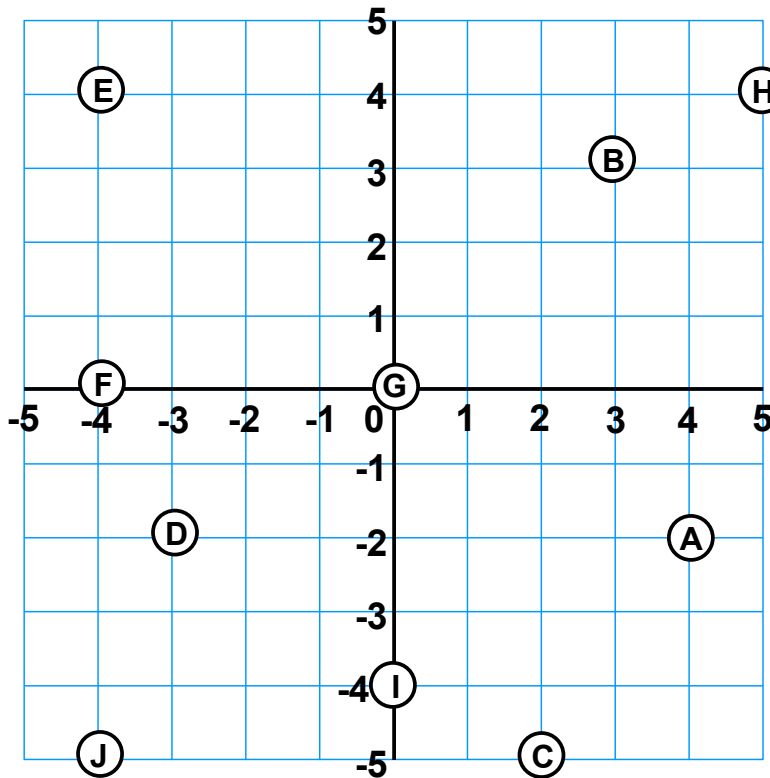


Mark the following coordinates on the grid. The first one has been done for you.



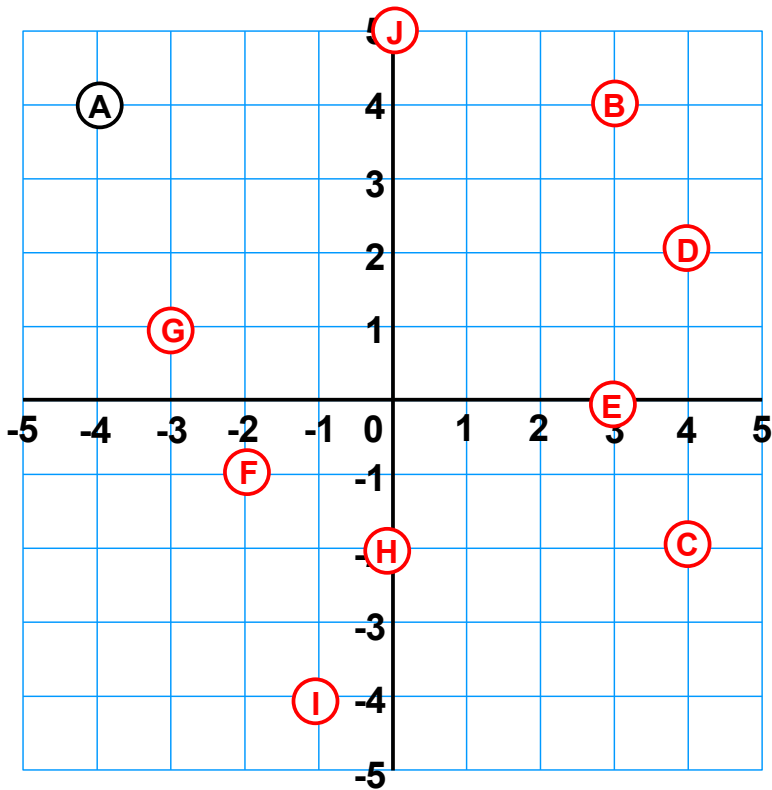
- A (-4, 4)
- B (3, 4)
- C (4, -2)
- D (4, 2)
- E (3, 0)
- F (-2, -1)
- G (-3, 1)
- H (0, -2)
- I (-1, -4)
- J (0, 5)

Write down the coordinates for each point shown on the grid. The first one has been done for you.

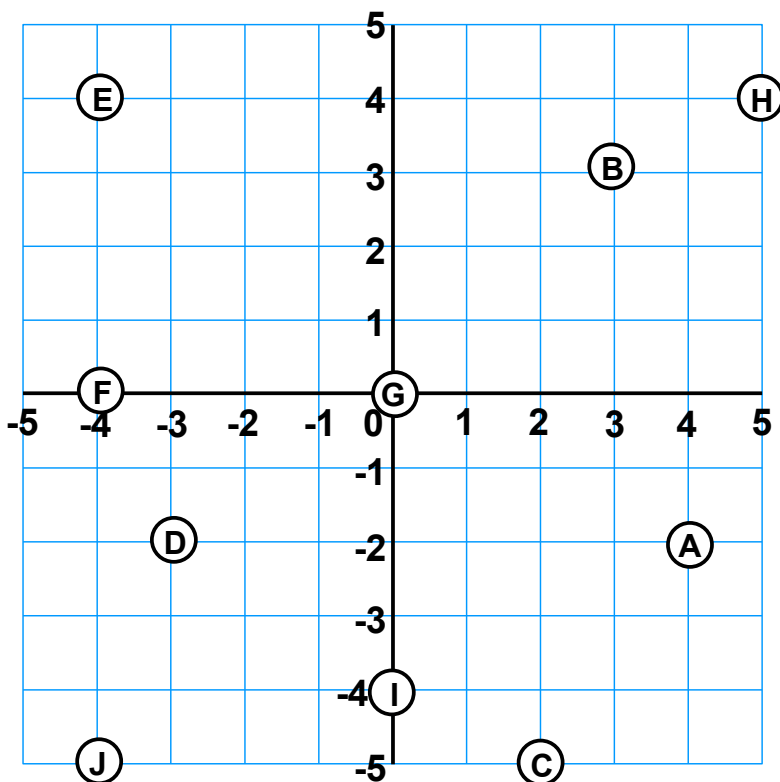


- A (4, -2)
- B
- C
- D
- E
- F
- G
- H
- I
- J

Answers



- A (-4, 4)
- B (3, 4)
- C (4, -2)
- D (4, 2)
- E (3, 0)
- F (-2, -1)
- G (-3, 1)
- H (0, -2)
- I (-1, -4)
- J (0, 5)



- A (4, -2)
- B (3, 3)
- C (2, -5)
- D (-3, -2)
- E (-4, 4)
- F (-4, 0)
- G (0, 0)
- H (5, 4)
- I (0, -4)
- J (-4, -5)